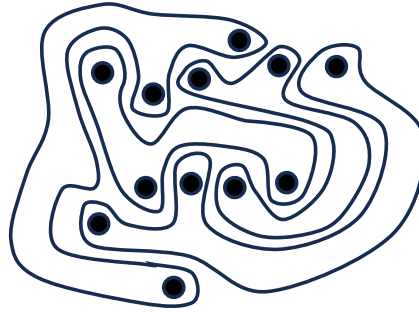


GRADES 1 AND 2 ANSWERS

SAMPLE QUESTION FOR 3 POINTS

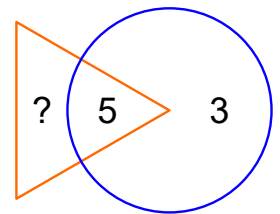
The picture shows 4 strange shapes. How many shapes have 3 dots inside?



- (A) 0 (B) 1 (C) 2 (D) 3 (E) 4

SAMPLE QUESTION FOR 4 POINTS


The sum of the numbers in the triangle should be twice the sum of the numbers in the circle. What number must replace the question mark?



- (A) 3 (B) 5 (C) 8 (D) 11 (E) 16

SAMPLE QUESTION FOR 5 POINTS

Ali, Bella, Chuck, and Dan each have 3 shapes. Each child has exactly one shape in common with each of the other children. Which shapes does Dan have?



- (A) □ ♥ ◇ (B) ♥ ○ △
 (C) ☆ ◇ ○ (D) ◇ ○ ♥
 (E) □ ☆ △